



Determine the name of each coin shown.



Answers

- 1. \_\_\_\_\_
- 2. \_\_\_\_\_
- 3. \_\_\_\_\_
- 4. \_\_\_\_\_
- 5. \_\_\_\_\_
- 6. \_\_\_\_\_
- 7. \_\_\_\_\_
- 8. \_\_\_\_\_



Determine the name of each coin shown.



Answers

1. quarter

2. quarter

3. nickel

4. penny

5. dime


6. penny

7. nickel

8. dime



Determine the name of each coin shown.



Answers

1. \_\_\_\_\_

2. \_\_\_\_\_

3. \_\_\_\_\_

4. \_\_\_\_\_

5. \_\_\_\_\_


6. \_\_\_\_\_

7. \_\_\_\_\_

8. \_\_\_\_\_



Determine the name of each coin shown.



Answers

1. penny

2. dime

3. quarter

4. quarter

5. nickel

6. penny

7. dime

8. nickel



Determine the name of each coin shown.



Answers

1. \_\_\_\_\_

2. \_\_\_\_\_

3. \_\_\_\_\_

4. \_\_\_\_\_

5. \_\_\_\_\_


6. \_\_\_\_\_

7. \_\_\_\_\_

8. \_\_\_\_\_



Determine the name of each coin shown.



Answers

1. dime

2. penny

3. quarter

4. nickel

5. penny

6. nickel

7. dime

8. quarter



Determine the name of each coin shown.



Answers

1. \_\_\_\_\_

2. \_\_\_\_\_

3. \_\_\_\_\_

4. \_\_\_\_\_

5. \_\_\_\_\_

6. \_\_\_\_\_

7. \_\_\_\_\_

8. \_\_\_\_\_



Determine the name of each coin shown.



Answers

1. nickel

2. nickel

3. dime

4. penny

5. quarter

6. penny

7. dime

8. quarter





Determine the name of each coin shown.



Answers

- 1. \_\_\_\_\_
- 2. \_\_\_\_\_
- 3. \_\_\_\_\_
- 4. \_\_\_\_\_
- 5. \_\_\_\_\_
- 6. \_\_\_\_\_
- 7. \_\_\_\_\_
- 8. \_\_\_\_\_



Determine the name of each coin shown.



Answers

1. penny

2. quarter

3. nickel

4. dime

5. quarter

6. dime

7. penny

8. nickel



Determine the name of each coin shown.



Answers

- 1. \_\_\_\_\_
- 2. \_\_\_\_\_
- 3. \_\_\_\_\_
- 4. \_\_\_\_\_
- 5. \_\_\_\_\_
- 6. \_\_\_\_\_
- 7. \_\_\_\_\_
- 8. \_\_\_\_\_



Determine the name of each coin shown.



Answers

1. dime

2. nickel

3. nickel

4. penny

5. quarter

6. penny

7. dime

8. quarter



Determine the name of each coin shown.



Answers

1. \_\_\_\_\_

2. \_\_\_\_\_

3. \_\_\_\_\_

4. \_\_\_\_\_

5. \_\_\_\_\_

6. \_\_\_\_\_

7. \_\_\_\_\_

8. \_\_\_\_\_



Determine the name of each coin shown.



Answers

1. nickel

2. nickel

3. dime

4. dime

5. penny

6. quarter

7. penny

8. quarter



Determine the name of each coin shown.



Answers

1. \_\_\_\_\_

2. \_\_\_\_\_

3. \_\_\_\_\_

4. \_\_\_\_\_

5. \_\_\_\_\_

6. \_\_\_\_\_

7. \_\_\_\_\_

8. \_\_\_\_\_



Determine the name of each coin shown.



Answers

1. dime

2. penny

3. nickel

4. penny

5. quarter

6. dime


7. quarter

8. nickel





Determine the name of each coin shown.



Answers

1. \_\_\_\_\_

2. \_\_\_\_\_

3. \_\_\_\_\_

4. \_\_\_\_\_

5. \_\_\_\_\_

6. \_\_\_\_\_

7. \_\_\_\_\_

8. \_\_\_\_\_



Determine the name of each coin shown.



Answers

1. dime

2. dime

3. penny

4. penny

5. quarter

6. nickel

7. nickel

8. quarter



Determine the name of each coin shown.




Answers

- 1. \_\_\_\_\_
- 2. \_\_\_\_\_
- 3. \_\_\_\_\_
- 4. \_\_\_\_\_
- 5. \_\_\_\_\_
- 6. \_\_\_\_\_
- 7. \_\_\_\_\_
- 8. \_\_\_\_\_



Determine the name of each coin shown.



Answers

1. penny

2. penny

3. nickel

4. quarter

5. dime

6. dime

7. quarter

8. nickel